



Ground Control

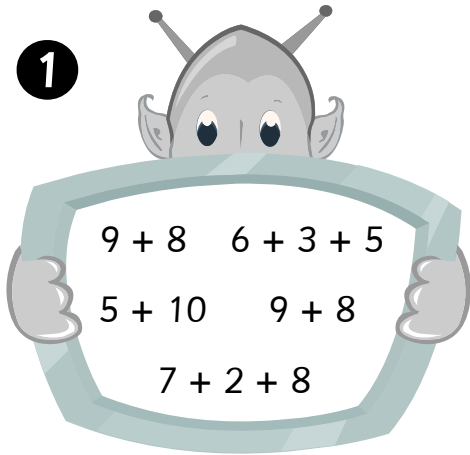
Activity Sheet

Name: _____ Class: _____

Circle all the expressions that total the number shown above the alien.

17

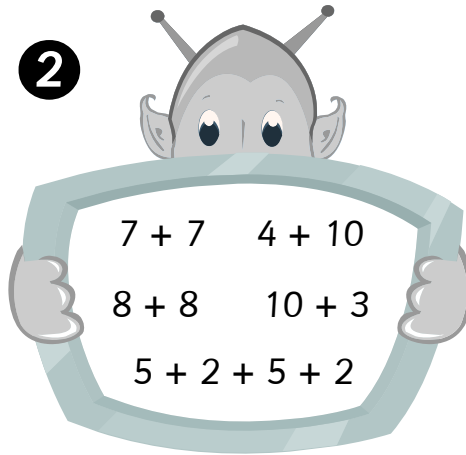
1



$9 + 8$ $6 + 3 + 5$
 $5 + 10$ $9 + 8$
 $7 + 2 + 8$

14

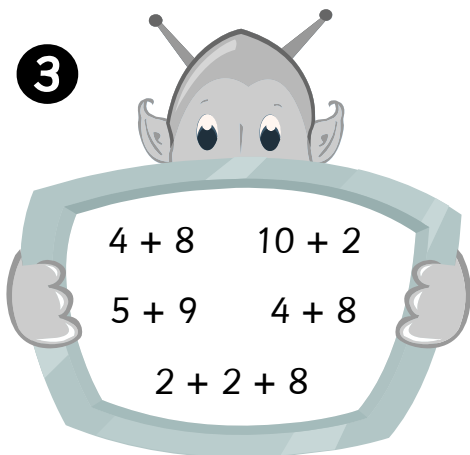
2



$7 + 7$ $4 + 10$
 $8 + 8$ $10 + 3$
 $5 + 2 + 5 + 2$

12


3



$4 + 8$ $10 + 2$
 $5 + 9$ $4 + 8$
 $2 + 2 + 8$

16

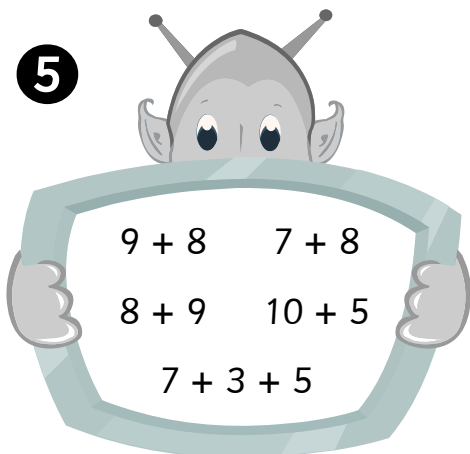
4



$9 + 7$ $10 + 8$
 $8 + 8$ $4 + 10$
 $9 + 1 + 6$

15

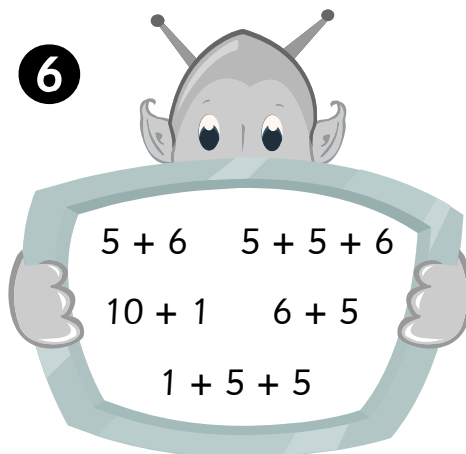
5



$9 + 8$ $7 + 8$
 $8 + 9$ $10 + 5$
 $7 + 3 + 5$

11

6



$5 + 6$ $5 + 5 + 6$
 $10 + 1$ $6 + 5$
 $1 + 5 + 5$

